


Counting Money

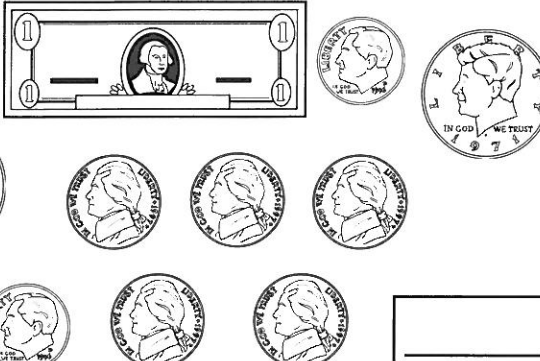
Count the money. Write the total on the line.





Start with the dollars.
Then count the half-dollars,
quarters, dimes, nickels,
and finally, pennies.


I'm saving
my money
for summer
vacation!

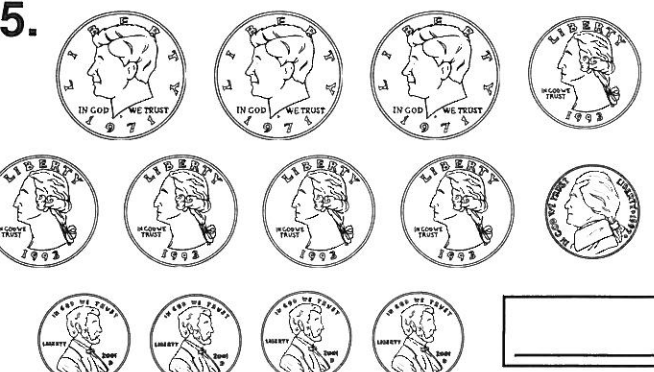



1. 

2. 

3. 

4. 

5. 

6. 

Counting Money



Count the coins: 25¢, 50¢, 75¢,
85¢, 95¢, \$1.05, \$1.15,
\$1.20, \$1.25, \$1.26, \$1.27.
When you reach 100¢,
it's the same as \$1.00.



Count the money.

Write the total.

1. 2 quarters, 3 nickels = _____
2. 7 dimes, 1 nickel, 4 pennies = _____
3. 1 half-dollar, 1 quarter, 2 dimes, 3 nickels = _____
4. 3 one-dollar bills, 2 quarters, 1 dime, 2 pennies = _____
5. 2 five-dollar bills, 7 dimes, 1 nickel, 3 pennies = _____
6. 4 ten-dollar bills, 7 dimes, 1 nickel, 3 pennies = _____
7. 1 ten-dollar bill, 3 one-dollar bills, 7 dimes = _____
8. 2 ten-dollar bills, 1 half-dollar, 4 quarters, 5 nickels = _____
9. 1 dollar bill, 1 quarter, 2 dimes, 3 nickels = _____
10. 2 half-dollars, 1 quarter, 4 dimes, 11 pennies = _____
11. 1 five-dollar bill, 2 one-dollar bills, 6 quarters = _____
12. 2 ten-dollar bills, 3 dimes, 7 nickels, 30 pennies = _____
13. 9 one-dollar bills, 5 quarters, 5 dimes, 15 pennies = _____
14. 6 ten-dollar bills, 3 half-dollars, 1 quarter, 7 nickels = _____
15. 6 five-dollar bills, 1 dollar bill, 1 half-dollar, 3 dimes = _____
16. 3 five-dollar bills, 8 half-dollars, 4 dimes, 9 nickels = _____